

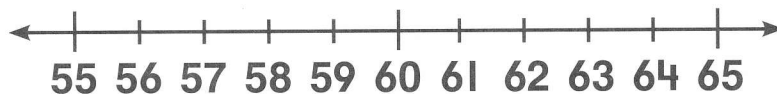
Count back to subtract. Write each difference.

1



$42 - 3 = \underline{\hspace{2cm}}$

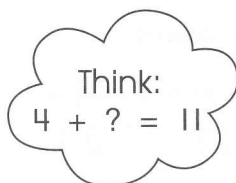
2



$65 - 1 = \underline{\hspace{2cm}}$

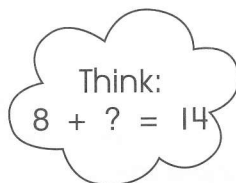
3

$11 - 4 = \underline{\hspace{2cm}}$



4

$14 - 8 = \underline{\hspace{2cm}}$



5

	tens	ones
-	7	3
		2

$73 - 2 = \underline{\hspace{2cm}}$

6

	tens	ones
-	4	6
		9

$46 - 9 = \underline{\hspace{2cm}}$

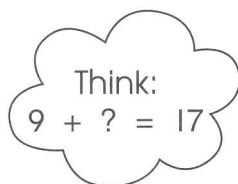


Tell how you use place value to subtract.

Use a related addition fact to subtract.

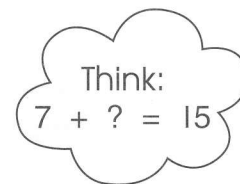
①

$17 - 9 = \underline{\quad}$



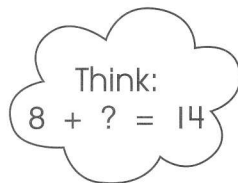
②

$15 - 7 = \underline{\quad}$



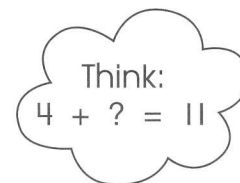
③

$14 - 8 = \underline{\quad}$



④

$11 - 4 = \underline{\quad}$



⑤

$18 - 9 = \underline{\quad}$

⑥

$16 - 8 = \underline{\quad}$

⑦

$12 - 7 = \underline{\quad}$

⑧

$13 - 6 = \underline{\quad}$



Tell how you can use an addition fact to help you subtract.

Find each difference.

①

$$49 - 4 =$$

tens	ones

$$\begin{array}{r} - \\ \hline \end{array}$$

②

$$29 - 7 =$$

tens	ones

$$\begin{array}{r} - \\ \hline \end{array}$$

③

$$38 - 6 =$$

tens	ones

$$\begin{array}{r} - \\ \hline \end{array}$$

④  $75 - 4 =$

⑤  $84 - 7 =$

⑥  $67 - 6 =$

⑦  $60 - 4 =$

⑧  $42 - 8 =$

⑨  $37 - 5 =$

⑩  $26 - 9 =$

⑪  $81 - 6 =$

⑫  $53 - 7 =$



Tell how you solved Problem 12.



**Solve.**

- 1 Jude has 84 crayons. He gives 3 to Lily. How many crayons does Jude have left?
- 2 Maddie has 75 markers. She gives 7 to Carl. How many markers does Maddie have left?

**Circle the correct answer for each problem.**

- 3 Shen has 81 stamps. He uses 5 stamps to mail some letters. How many stamps does he have left?  
  
a) 76 stamps  
b) 86 stamps  
c) 77 stamps  
d) 31 stamps
- 4 Farah has 63 cents. She spends 8 cents. How many cents does she have left?  
  
a) 71 cents  
b) 66 cents  
c) 55 cents  
d) 23 cents